

Name: _____

Date: _____


Measurement Test Review

Review Sheet Due Thursday, March 19th

Test is on Friday, March 20th

1. Use the shaded figures below to answer the following questions:


Shape A:



Perimeter: _____

Area: _____

Shape B:



Perimeter: _____

Area: _____

Which shape has the greater perimeter? _____

What is the difference in the perimeters of the two shapes? _____

Which shape has the greater area? _____

What is the difference in the areas of the two shapes? _____

2. Complete the following conversions.

a. 12 yards = _____ feet

d. 16 meters = _____ centimeters

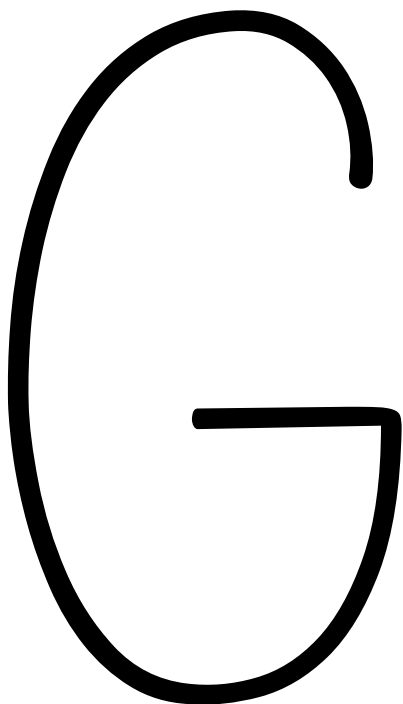
b. 6 yards = _____ inches

e. 3 kilometers = _____ meters

c. 45 feet = _____ yards

f. 27 centimeters = _____ millimeters

3. Complete the Big G. Then, use the Big G to complete the conversion on the right.



2 quarts = _____ pints

6 pints = _____ cups

10 cups = _____ pints

3 quarts = _____ cups

6 pints = _____ quarts

4. Use the number lines to show your work as you solve the following problems:

a. Joey arrived at the gym at 2:46 p.m. He ran on the treadmill for 20 minutes, lifted weights for 33 minutes, and stretched for 16 minutes. At what time did Joey finish his work-out?



b. Jimmy woke up at 6:35 a.m. for work. He spent 58 minutes getting ready for the day before leaving his house. At what time did Jimmy leave his house to go to work?



Remember to use your notes and the Fourth Grade Weebly to review Multiplication, Division, Fractions, Decimals and everything else we have learned up to this point in fourth grade!